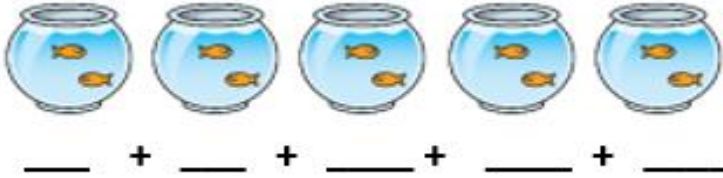


<https://youtu.be/GvTcpfSnOMQ?t=1> sing along to the song and count in 2's.
<https://youtu.be/OCxvNtrcDIIs?t=8> dance along with Jack Hartman counting in 2's.

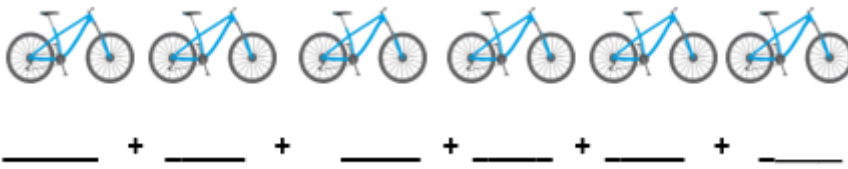
Counting in 2's fluency.

How many fish are there ?



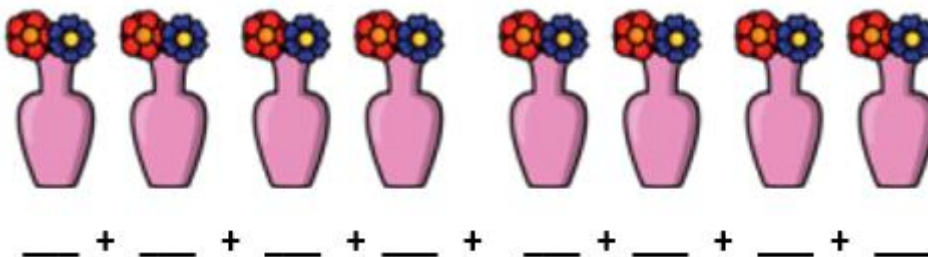
Write the number of fish in each bowl, then count in 2's to find the total.
There are _____ fish in total.

How many wheels are there?



Write the number of wheels on each bike, then count in 2's to find the total.
There are _____ wheels in total.

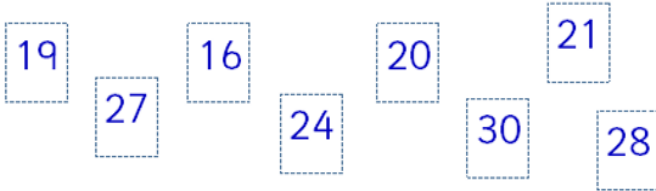
How many flowers are there?



Write the number of flowers in each vase, then count in 2's to find the total.
There are _____ flowers in total.

Counting in 2's reasoning.

Look at these numbers;



Circle the ones that are multiples of 2.
Prove your answer.

Use the hundred square to help you.

1	2	3	4	5	6	7	8	9	10
11	12	13	14	15	16	17	18	19	20
21	22	23	24	25	26	27	28	29	30
31	32	33	34	35	36	37	38	39	40
41	42	43	44	45	46	47	48	49	50
51	52	53	54	55	56	57	58	59	60
61	62	63	64	65	66	67	68	69	70
71	72	73	74	75	76	77	78	79	80
81	82	83	84	85	86	87	88	89	90
91	92	93	94	95	96	97	98	99	100

Counting in 2's problem solving

How much money is in Tyler's money box?



If he adds 2 more 2p coins, how much will he have?



He has altogether.