


Counting in 5's

Count in 5s and complete the sentence below.



The value of the hands is

.

Answer

Count in 5s and complete the sentence below.



5



10



15



20



25



30



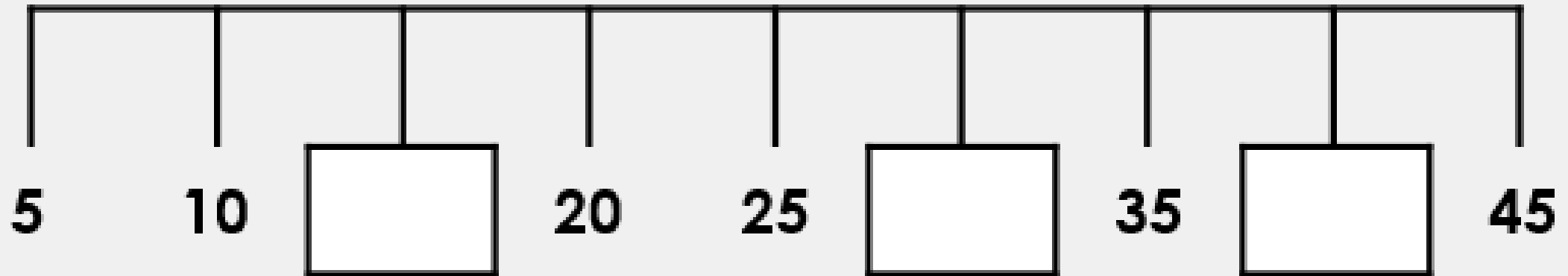
35

The value of the hands is

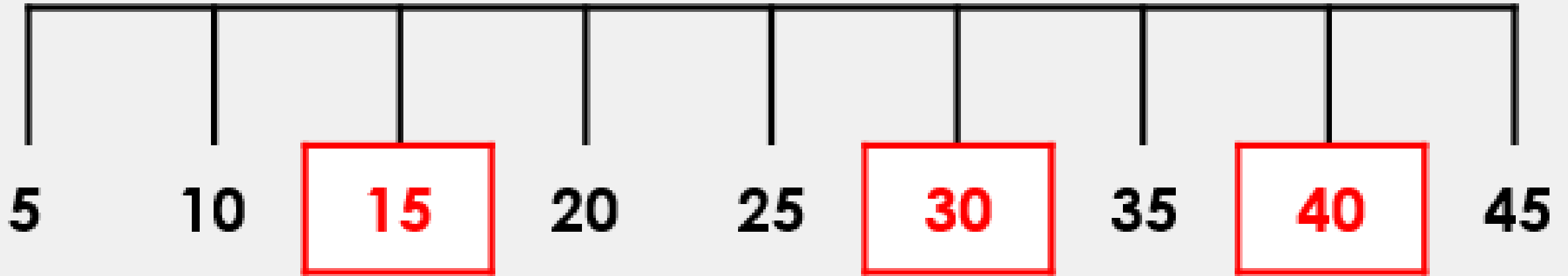
35

.

Fill in the missing numbers on the number line.



Answer -Fill in the missing numbers on the number line.




Reasoning

Fay has put 5 candles onto each cake.



She says,



I have 6 candles altogether.

Is she right? Explain your answer.

Fay has put 5 candles onto each cake.



She says,



I have **6** candles altogether.

Is she right? Explain your answer.

Fay is incorrect because she has 6 cakes. Each cake has 5 candles. She has 30 candles altogether.

Problem solving

Find the way through the maze by counting forwards in 5s.

	18	50	12	22	45	finish
start	0	5	10	43	40	
	16	14	15	38	35	
	23	47	20	25	30	
	8	28	19	27	34	

Answer

Find the way through the maze by counting forwards in 5s.

	18	50	12	22	45	finish
start	0	5	10	43	40	
	16	14	15	38	35	
	23	47	20	25	30	
	8	28	19	27	34	