


<https://youtu.be/EemjeA2Djjw?t=2> sing along to the song counting in 's

<https://youtu.be/amxVL9KUmq8?t=4> sing and dance along to Jack Hartman counting in 5's.

Counting in 5's

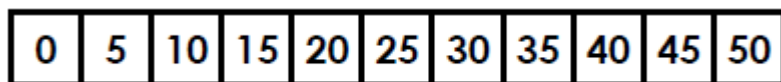
Fluency

a. Count in 5's and complete the sentence below.

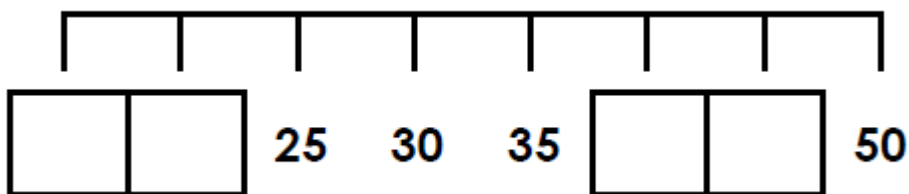


The value of the objects is _____.

Use the number line to help you.



b. Fill in the missing numbers.



c. Circle the mistakes in the sequences below.

A.

5	ten	15	22	25
---	-----	----	----	----

B.

ten	19	20	25	thirty
-----	----	----	----	--------

Reasoning

James is playing a game with dice.



How many more dice will he need to score 20?

draw the dice in to show your answer

and explain it to an adult.

0	5	10	15	20	25	30	35	40	45	50
---	---	----	----	----	----	----	----	----	----	----

Problem solving

Find your way through the maze by counting forward in 5's.

start	0	49	forty-six	27	eleven
	five	1 ten	38	36	31
	44	1 ten 5 ones	20	twenty -two	16
	41	24	25	36	fifty
	32	23	thirty	35	4 tens