

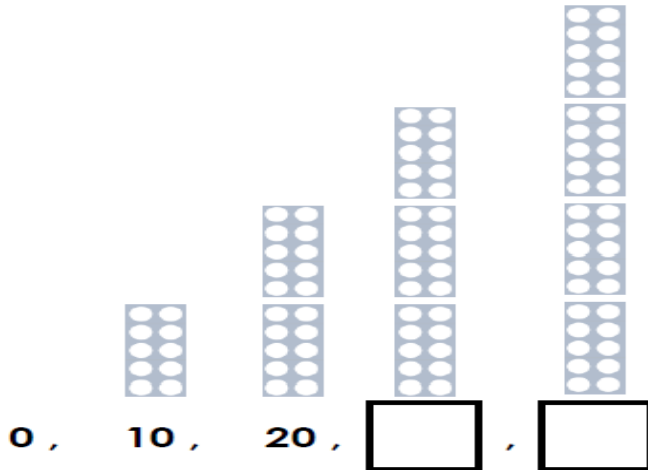
<https://youtu.be/Ftati8iGQcs> sing along to the song counting in 's

<https://youtu.be/W8CE0IAOGas?t=4> sing and dance along to Jack Hartman counting in 5's.

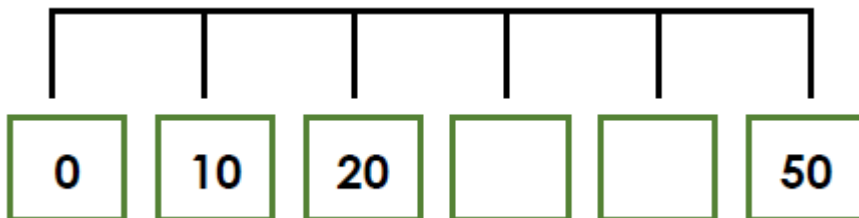
Counting in 10's

Fluency

a. Count in 10's and complete the sequence below.



b. Fill in the missing numbers.



c. Complete the sentences below.



There are 10 petals on each flower. how many petals are there altogether? Count in 10's to find your answer.

Reasoning

Wilson is counting in 10's.

| | | | | | | | | | |
|----|----|----|----|----|----|----|----|----|-----|
| 1 | 2 | 3 | 4 | 5 | 6 | 7 | 8 | 9 | 10 |
| 11 | 12 | 13 | 14 | 15 | 16 | 17 | 18 | 19 | 20 |
| 21 | 22 | 23 | 24 | 25 | 26 | 27 | 28 | 29 | 30 |
| 31 | 32 | 33 | 34 | 35 | 36 | 37 | 38 | 39 | 40 |
| 41 | 42 | 43 | 44 | 45 | 46 | 47 | 48 | 49 | 50 |
| 51 | 52 | 53 | 54 | 55 | 56 | 57 | 58 | 59 | 60 |
| 61 | 62 | 63 | 64 | 65 | 66 | 67 | 68 | 69 | 70 |
| 71 | 72 | 73 | 74 | 75 | 76 | 77 | 78 | 79 | 80 |
| 81 | 82 | 83 | 84 | 85 | 86 | 87 | 88 | 89 | 90 |
| 91 | 92 | 93 | 94 | 95 | 96 | 97 | 98 | 99 | 100 |


He thinks he will say the number 50.

Is Wilson correct?

Explain your answer to an adult. Colour in the 10's to help you find your answer.

Problem solving

Liz is packing boxes. Each box has 10 toys inside. how many more boxes dos Liz need to pack a total of 60 toys?



Draw in the boxes to show your answer.