

https://youtu.be/A8trPHq1rx8?list=TLpQMDQwNjIwMjCZkxppsKwU_g watch the video to learn about repeated addition.

Repeated addition

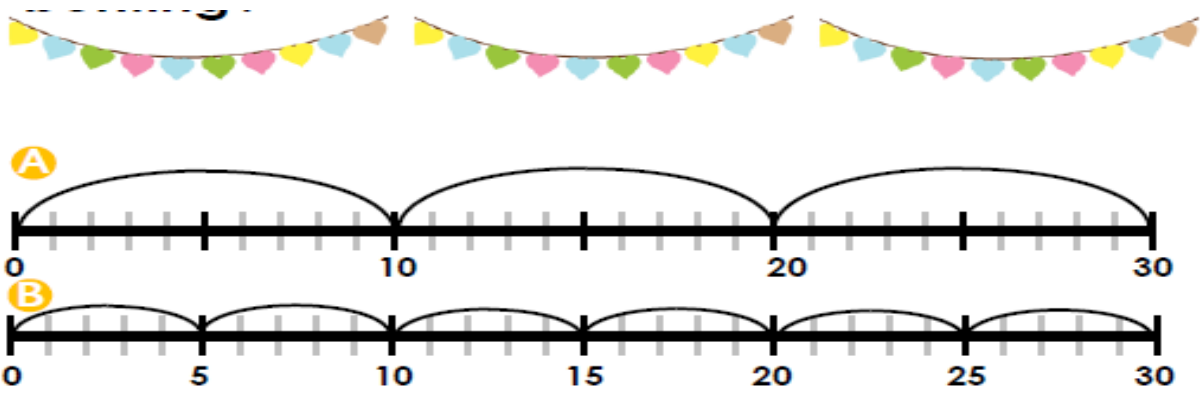
Fluency

a. There are 2 children in each tent. Draw them into help you complete the number sentence below.



_____ + _____ + _____ + _____ + _____ + _____ + _____ + _____ = _____


b. Which number line matches the bunting?



How many crayons are there in total?




Which cubes match the calculation?



_____ + _____ + _____ + _____ + _____ = _____

Reasoning

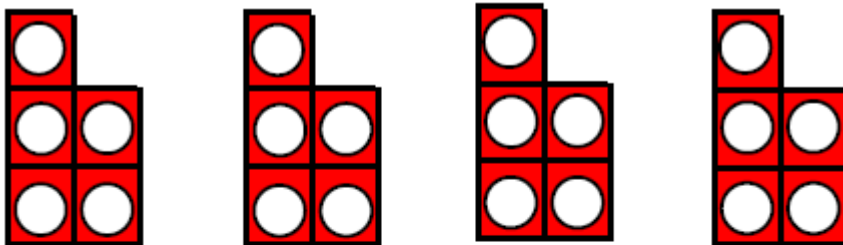
True or False? If Ms Rahman has 5 cookies in each jar, she will have 25 cookies altogether.



Draw the cookies to help you find your answer and write the number sentence in the box.

Problem solving

The calculations are wrong. Write your number sentence to match the numicon and find the correct answer.



$$5 + 5 + 5 = 20$$



$$2 + 2 + 2 + 2 + 2 = 8$$